


# Telling time - 5 minute intervals (draw the clock)

## Grade 3 Time Worksheet


Draw the time shown on each clock.

1.




4:40

2.




5:50

3.




10:50

4.




6:30

5.




7:35

6.




4:05

7.




7:55

8.



10:20

9.



2:45


## Telling time - 5 minute intervals (draw the clock)

---

### Grade 3 Time Worksheet

Draw the time shown on each clock.

1.




4:40

2.



5:50

3.



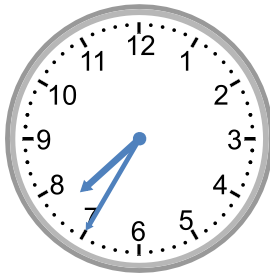
10:50

4.




6:30

5.



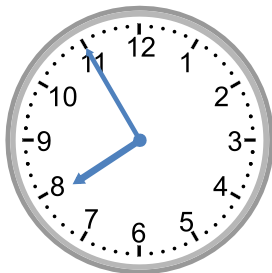
7:35

6.




4:05

7.



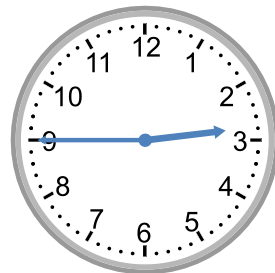
7:55

8.



10:20

9.



2:45