


# Telling time - 5 minute intervals (draw the clock)

## Grade 3 Time Worksheet


Draw the time shown on each clock.

1.




4:45

2.




4:05

3.




9:40

4.




8:00

5.




8:20

6.




8:10

7.




12:35

8.



4:25

9.



3:05

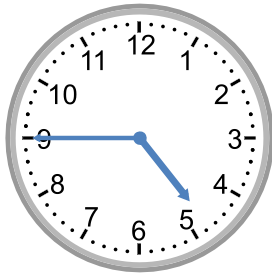
## Telling time - 5 minute intervals (draw the clock)

---

### Grade 3 Time Worksheet


Draw the time shown on each clock.

1.



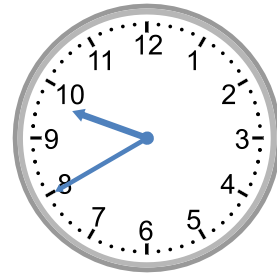
4:45

2.




4:05

3.




9:40

4.



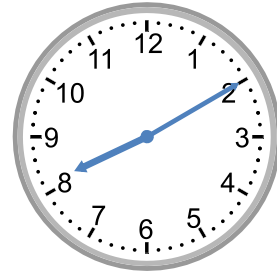
8:00

5.



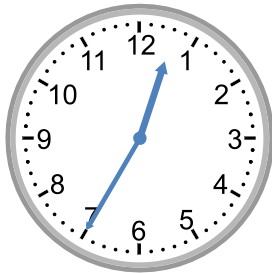
8:20

6.




8:10

7.




12:35

8.



4:25

9.



3:05