


## Telling time - 5 minute intervals (draw the clock)

---

### Grade 3 Time Worksheet


Draw the time shown on each clock.

1.




12:55

2.




8:35

3.




3:50

4.




6:45

5.




8:25

6.




1:30

7.




3:45

8.



3:35

9.



1:15


## Telling time - 5 minute intervals (draw the clock)

---

### Grade 3 Time Worksheet

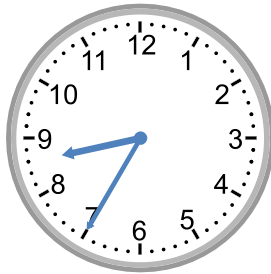
Draw the time shown on each clock.

1.



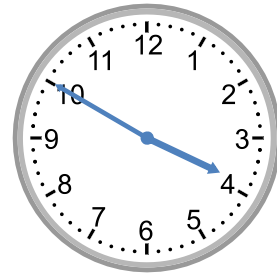
12:55

2.



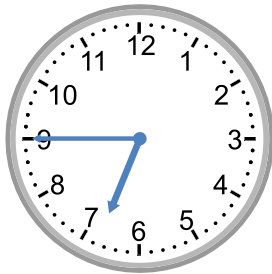
8:35

3.



3:50

4.




6:45

5.



8:25

6.



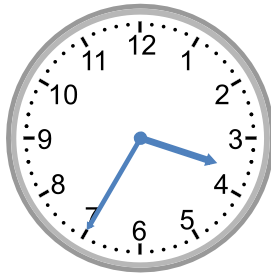
1:30

7.




3:45

8.



3:35

9.



1:15