


Classifying triangles (equilateral / isosceles / scalene / right)

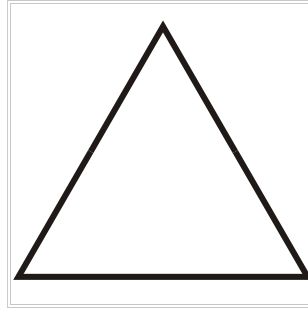
Grade 3 Geometry Worksheet

Classify the triangles.

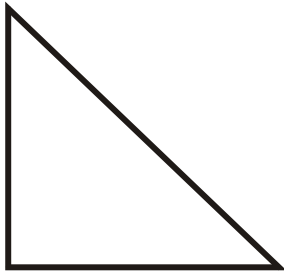
1.



2.



3.



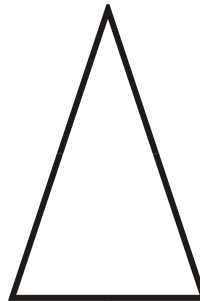
4.



5.



6.

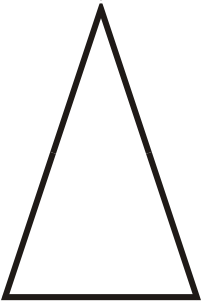


Classifying triangles (equilateral / isosceles / scalene / right)

Grade 3 Geometry Worksheet

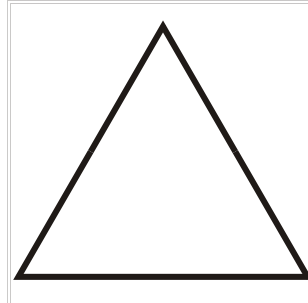
Classify the triangles.

1.



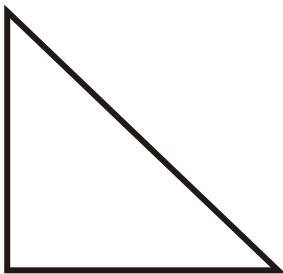
Isosceles Triangle

2.



Equilateral Triangle

3.



Right Triangle

4.



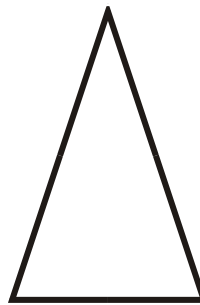
Scalene Triangle

5.



Scalene Triangle

6.



Isosceles Triangle
